

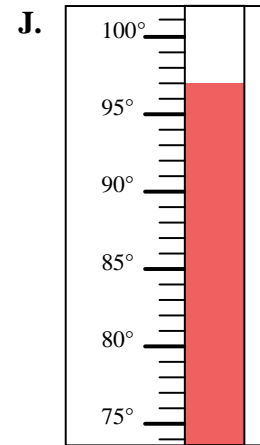
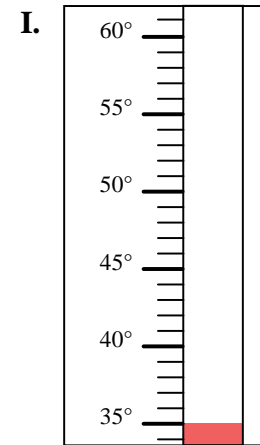
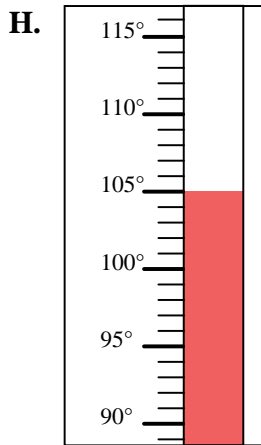
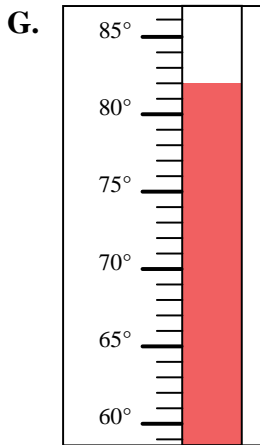
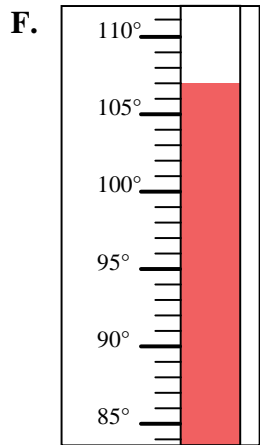
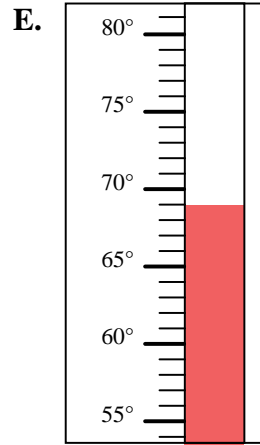
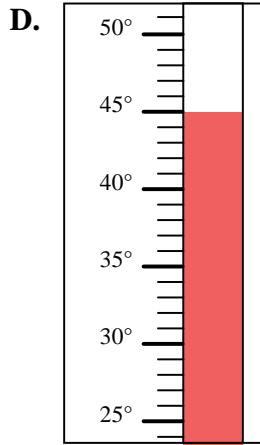
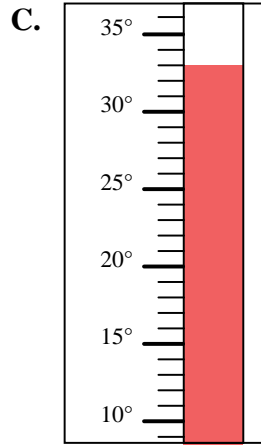
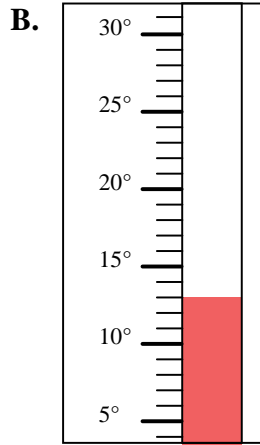
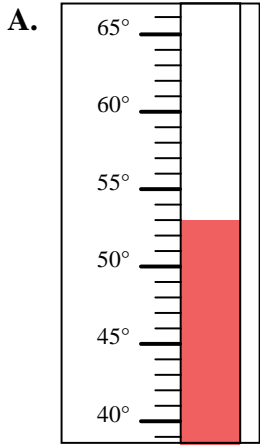


Determine which letter best answers each question.

**Answers**

- 1) Which thermometer best represents the temperature 82°?
- 2) Which thermometer best represents the temperature 13°?
- 3) Which thermometer best represents the temperature 97°?
- 4) Which thermometer best represents the temperature 107°?
- 5) Which thermometer best represents the temperature 45°?
- 6) Which thermometer best represents the temperature 33°?
- 7) Which thermometer best represents the temperature 35°?
- 8) Which thermometer best represents the temperature 53°?
- 9) Which thermometer best represents the temperature 105°?
- 10) Which thermometer best represents the temperature 69°?

1. \_\_\_\_\_
2. \_\_\_\_\_
3. \_\_\_\_\_
4. \_\_\_\_\_
5. \_\_\_\_\_
6. \_\_\_\_\_
7. \_\_\_\_\_
8. \_\_\_\_\_
9. \_\_\_\_\_
10. \_\_\_\_\_





Determine which letter best answers each question.

- 1) Which thermometer best represents the temperature 82°?
- 2) Which thermometer best represents the temperature 13°?
- 3) Which thermometer best represents the temperature 97°?
- 4) Which thermometer best represents the temperature 107°?
- 5) Which thermometer best represents the temperature 45°?
- 6) Which thermometer best represents the temperature 33°?
- 7) Which thermometer best represents the temperature 35°?
- 8) Which thermometer best represents the temperature 53°?
- 9) Which thermometer best represents the temperature 105°?
- 10) Which thermometer best represents the temperature 69°?

**Answers**

1.     **G**
2.     **B**
3.     **J**
4.     **F**
5.     **D**
6.     **C**
7.     **I**
8.     **A**
9.     **H**
10.     **E**

